


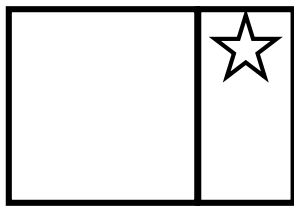
Listen to the audio file and write your answers on rough paper or on an application like Microsoft Word.

1. Listen to Kevin describe the flags of 12 Brazilian states, and identify which state each of the 12 flags below belongs to. All 12 states' names are given in the box below.

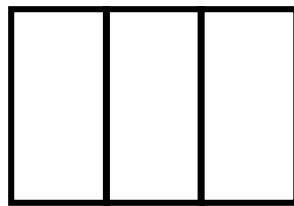
Acre ★ Amazonas ★ Bahia ★ Goiás ★ Maranhão ★ Mato Grosso  
Mato Grosso do Sul ★ Pará ★ Rondônia ★ Roraima ★ Sergipe ★ Tocantins



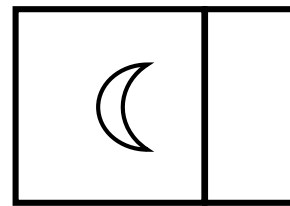
2. Below are 12 uncoloured flags belonging to the towns of Lontrapura. Listen to Kevin describe each flag and colour in the missing colours. If you do not have the appropriate colour pencil or marker, write the name of the colour in the appropriate area instead.



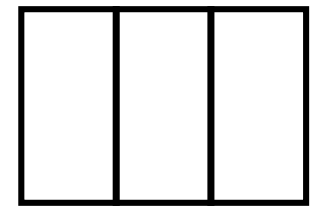
**Tessensohn**



**Tan Chu Kang**

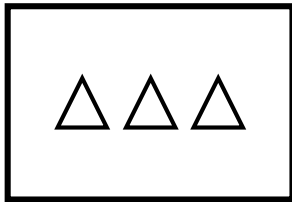


**Bayanula**

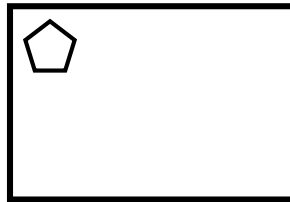


**Padang Selaseh**

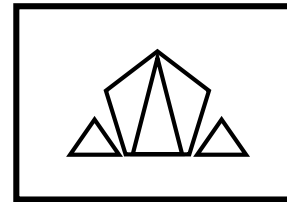
The other 8 flags are on the next page.



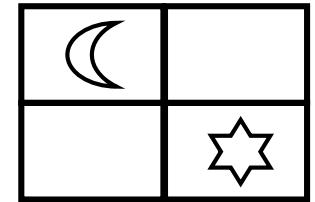
**Kalrayan**



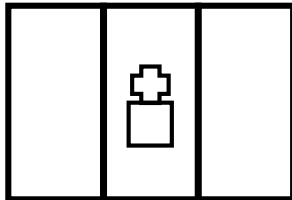
**Re Sebastiang**




**Sarkies**



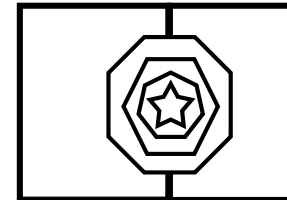
**Ishaktown**




**Tullamore**



**Inti**



**Telok Kastels**



**Ottersgate**

**3. CHALLENGE** Describe the flag of the Kalispel Nation below in full sentences in Kristang.

